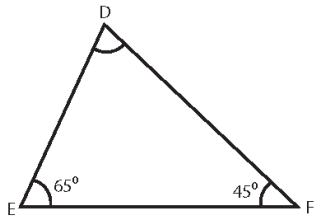


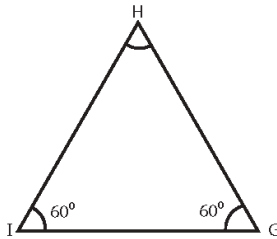
Одреди ја големината на непознатиот агол кај секоја од фигурите!

1)



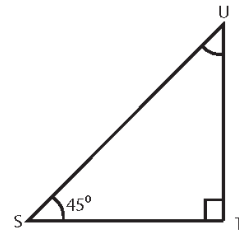
$\angle D =$

2)



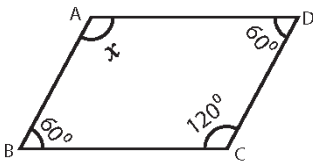
$\angle H =$

3)



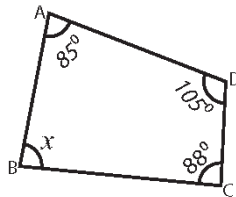
$\angle U =$

4)



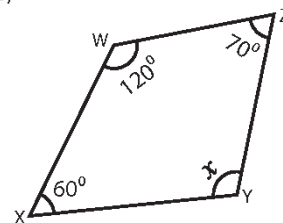
$x =$

5)



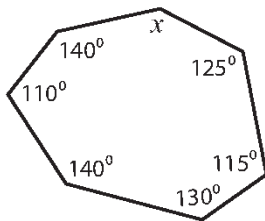
$x =$

6)



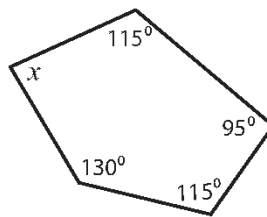
$x =$

7)



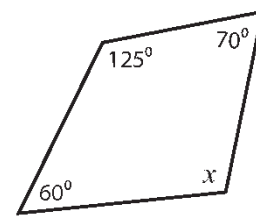
збирот на сите внатрешни агли е:
 $x =$

8)



збирот на сите внатрешни агли е:
 $x =$

9)



збирот на сите внатрешни агли е:
 $x =$