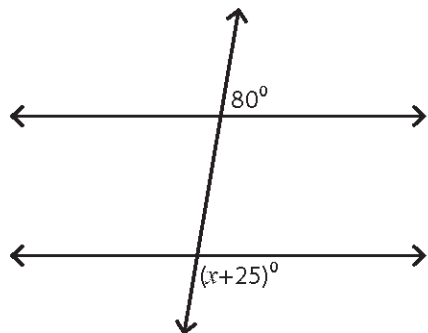


- 1) $\angle 1$ и $\angle 8$ _____
- 2) $\angle 4$ и $\angle 6$ _____
- 3) $\angle 3$ и $\angle 5$ _____
- 4) $\angle 2$ и $\angle 7$ _____
- 5) $\angle 3$ и $\angle 6$ _____
- 6) $\angle 1$ и $\angle 7$ _____
- 7) $\angle 4$ и $\angle 5$ _____
- 8) $\angle 2$ и $\angle 8$ _____

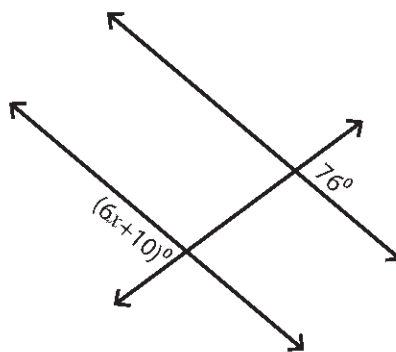
2. Одреди го x ?!

1)



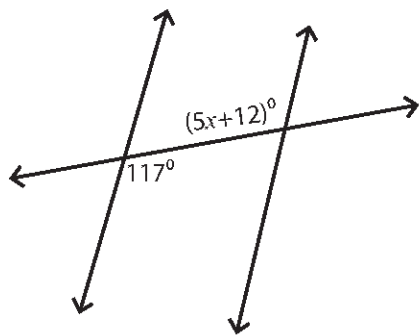
$x =$ _____

2)



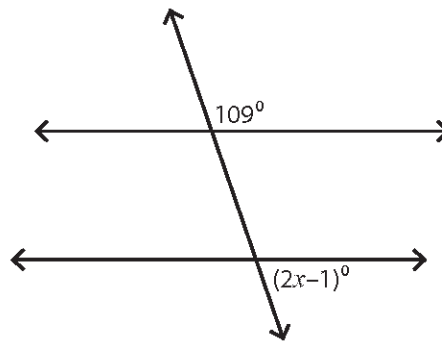
$x =$ _____

3)



$x =$ _____

4)



$x =$ _____

