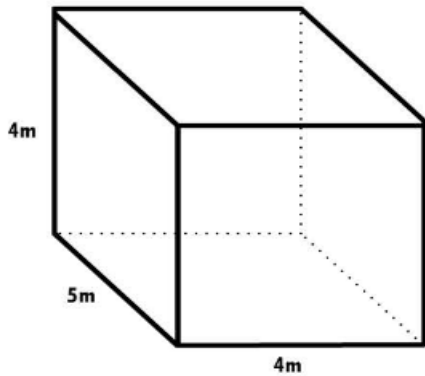
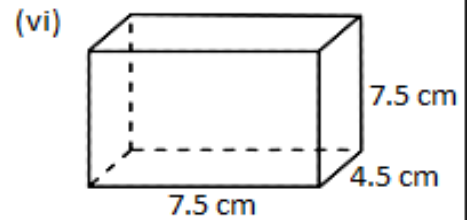
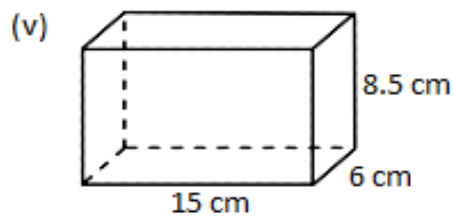
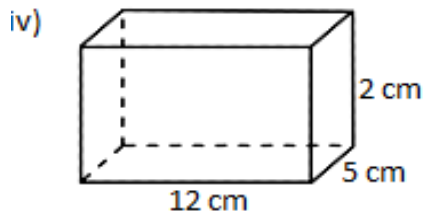
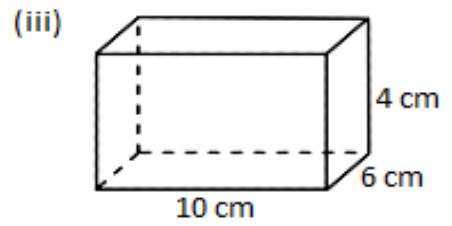
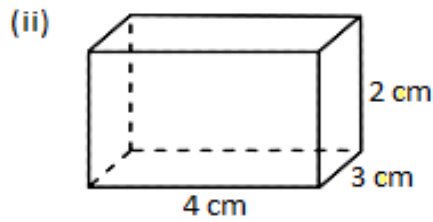
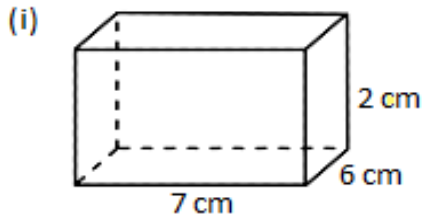


**Задача 1.**

Пресметај волумен на квадар



$$V = \underline{\quad} \times \underline{\quad} \times \underline{\quad}$$

$$= \underline{\quad} \text{ m}^3$$

$$V = \underline{\quad} \times \underline{\quad} \times \underline{\quad}$$

$$= \underline{\quad} \text{ m}^3$$

