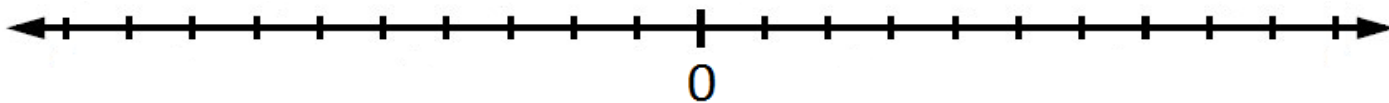
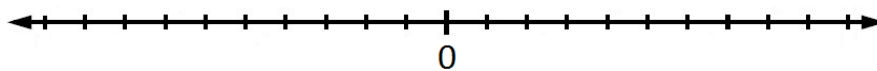


1. Подреди ги броевите 1, -4, 6, -8, 4, 5, -6, -7, -1, 2, -3, 7, 3, -10 на бројната права:

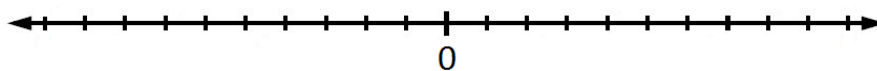


2. Пресметај користејќи бројна права:

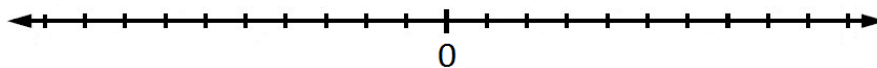
а) $4 + (-6) =$ _____



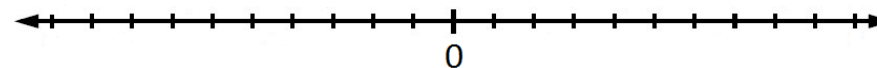
б) $5 + (-3) =$ _____



в) $3 - (-6) =$ _____



г) $4 - (-5) =$ _____



3. Пресметај

а) $(+5) + (-3) =$

б) $(-7) + (+9) =$

в) $(-10) + (-17) =$

г) $(+13) + (+12) =$

д) $(8) - (-6) =$

ѓ) $+6 + 3 =$

е) $-10 - 4 =$

ж) $-6 - 8 =$

з) $+1 - 8 =$

ц) $-2 + 4 =$