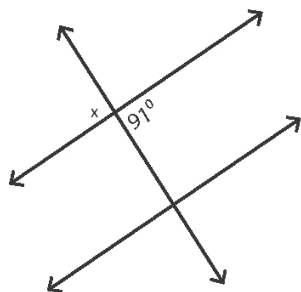


Наставен лист 34

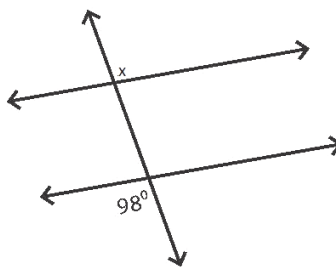
Задача: Под секој од цртежите запиши какви се аглите и одреди ја големината на аголот X !

1)



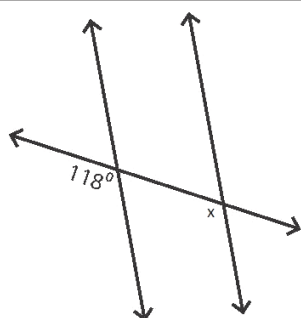
$$x = \underline{\hspace{2cm}}$$

2)



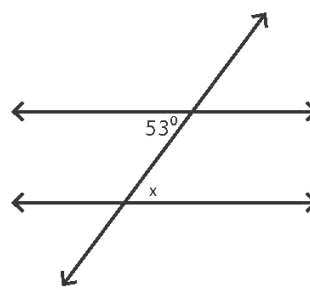
$$x = \underline{\hspace{2cm}}$$

3)



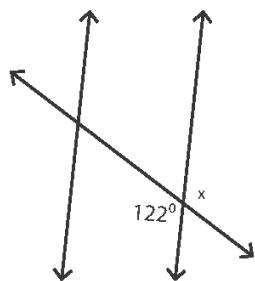
$$x = \underline{\hspace{2cm}}$$

4)



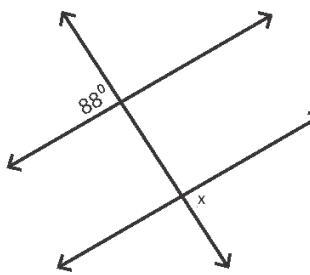
$$x = \underline{\hspace{2cm}}$$

5)



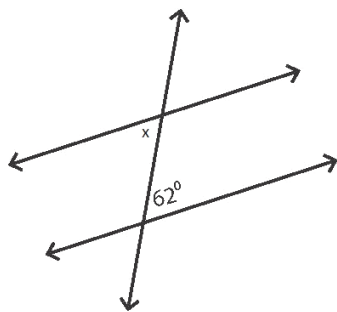
$$x = \underline{\hspace{2cm}}$$

6)



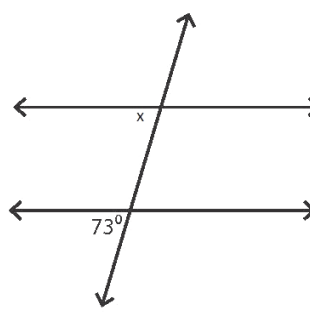
$$x = \underline{\hspace{2cm}}$$

7)



$$x = \underline{\hspace{2cm}}$$

8)



$$x = \underline{\hspace{2cm}}$$

