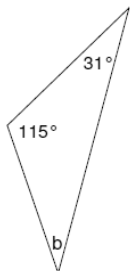


Наставен лист 35

1. Одреди го непознатиот агол!

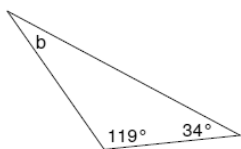
1)



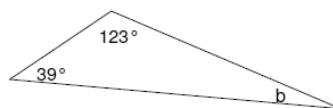
2)



3)

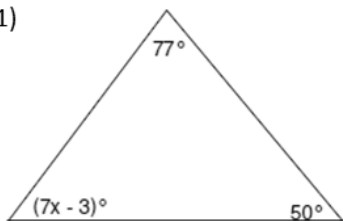


4)

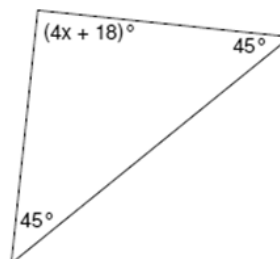


2. Одреди го X !

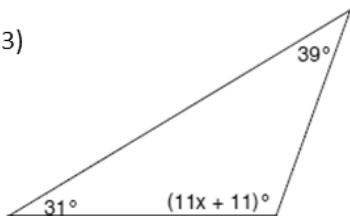
1)



2)



3)



4)

